

North America is a **continent.**

Europe is a **continent.**

Asia is a **continent**

South America is a **continent.**

Africa is a **continent.**

Australia is a **continent.**

 Pacific Ocean

 Atlantic Ocean

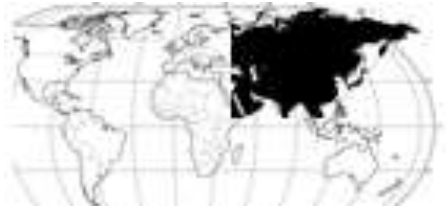
 Indian Ocean

This is an **island.**

Antarctica is a **continent.**

1.

- Ⓐ Antarctica
- Ⓑ Africa
- Ⓒ Asia
- Ⓓ North America



2.

- Ⓐ Australia
- Ⓑ Antarctica
- Ⓒ Europe
- Ⓓ Asia



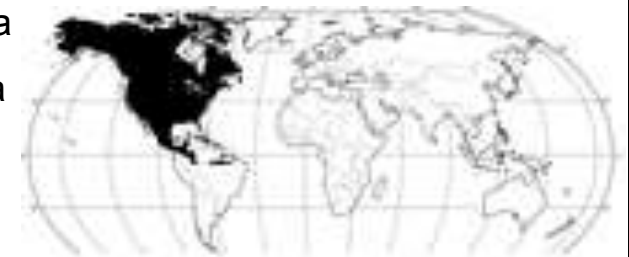
3.

- Ⓐ Antarctica
- Ⓑ Asia
- Ⓒ Australia
- Ⓓ Africa



4.

- Ⓐ South America
- Ⓑ North America
- Ⓒ Europe
- Ⓓ island



5.

- Ⓐ Africa
- Ⓑ Asia
- Ⓒ island
- Ⓓ North America



6.

- Ⓐ Antarctica
- Ⓑ ocean
- Ⓒ continent
- Ⓓ Asia



7.



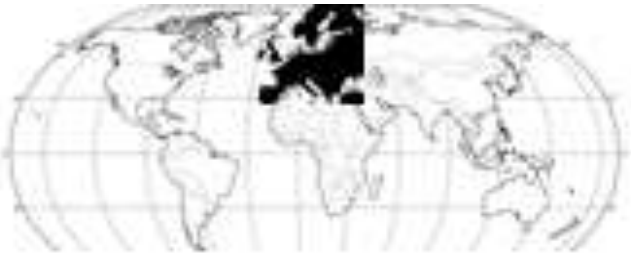
- Ⓐ Australia
- Ⓑ Africa
- Ⓒ North America
- Ⓓ South America

8.



- Ⓐ Africa
- Ⓑ Antarctica
- Ⓒ Australia
- Ⓓ South America

9.



- Ⓐ North America
- Ⓑ South America
- Ⓒ Europe
- Ⓓ Asia

10.

Minnesota is on
what **continent**?



- Ⓐ Africa
- Ⓑ Europe
- Ⓒ North America
- Ⓓ South America